

Chapter 1: The Staff

breezin' thru™ theory

Mad Dash Drills



NAME: _____ CLASS: _____


SCORE: _____/38


TIME: 2 MINUTES


1a: Naming Notes Within the Treble Clef Staff




Written: Write in the letter names under the following notes. Use upper case letters.

1. 
Example E

2. 


3. 

4. 

Chapter 1: The Staff

breezin' thru™ theory

Mad Dash Drills



NAME: _____ CLASS: _____

SCORE: _____ /31

TIME: 2 MINUTES

1b: Entering Notes Within the Treble Clef Staff



Task: Enter QUARTER notes within the staff above each letter name.



Time: You have 2 minutes.

Example

Start Here

1.

D E (High) C F (High) G B D A

2.

F (Low) A E (Low) D C G B E (High)

3.

A C E (High) G F (High) B A D

4.

G B D A F (Low) C D E (Low)

Chapter 1: The Staff

breezin' thru™ theory

Mad Dash Drills



NAME: _____ CLASS: _____

SCORE: _____ /38

TIME: 2 MINUTES

1c: Naming Ledger Line Notes in Treble Clef



Written:

Write in the letter names under the following notes. Use upper case letters.

1. *Start here*

Example G

2.

3.

4.

Chapter 1: The Staff



NAME: _____ CLASS: _____

SCORE: _____ /31

TIME: 2 MINUTES

1d: Entering Ledger Line Notes in Treble Clef




Task: Enter notes ABOVE the staff for questions 1 & 2.
Enter notes BELOW the staff for questions 3 & 4.

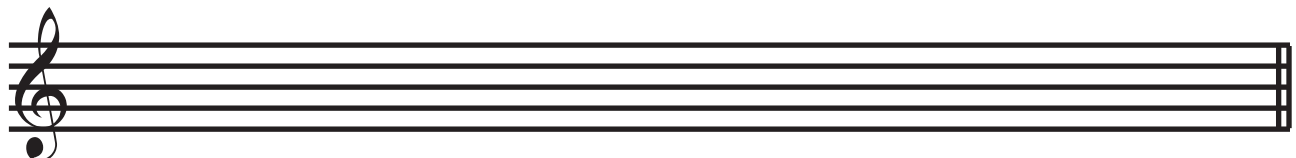


Time: You have 2 minutes.

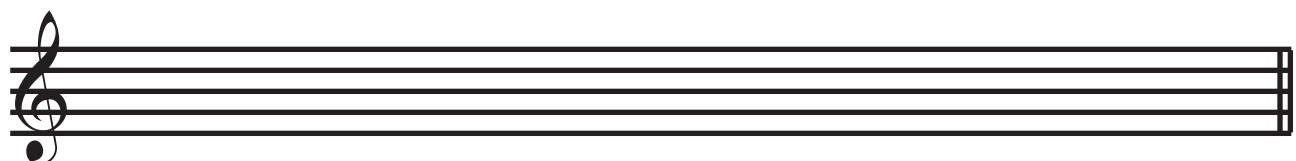
Enter quarter notes ABOVE the staff

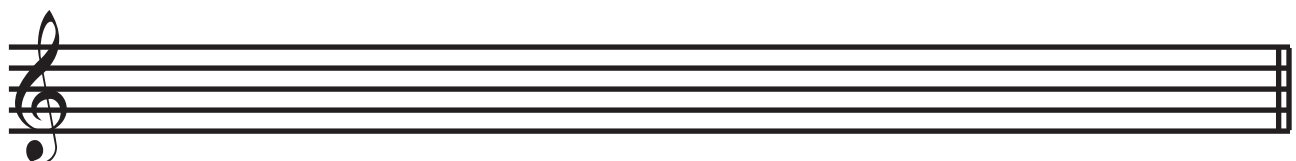
Example

1. 
D A C B G B D A

2. 
C A B D C G B A

Enter quarter notes BELOW the staff

3. 
B C A G D B A D

4. 
G B D A G C D A

Chapter 1: The Staff

breezin' thru™ theory

Mad Dash Drills



NAME: _____ CLASS: _____

SCORE: _____ /39

TIME: 2 MINUTES

1e: Naming All Notes in Treble Clef



Written: Write in the letter names under the following notes. Use upper case letters.

1.

Example C

2.

3.

4.